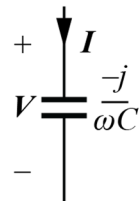
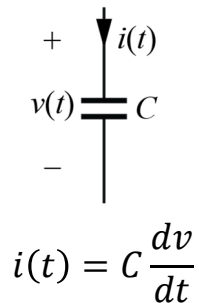
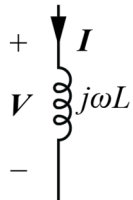
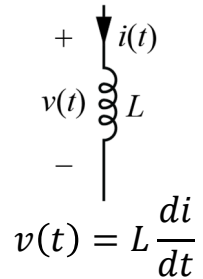
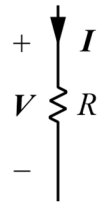
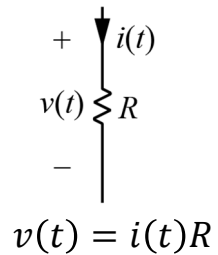


Phasor Notation

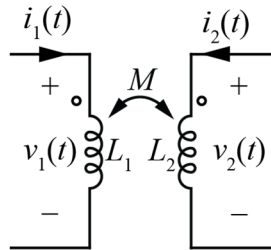
Phasor Circuit Elements

Time Domain

Phasor Domain

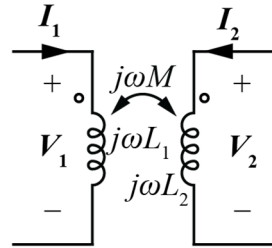


Time Domain



$$v_1(t) = L_1 \frac{di_1}{dt} + M \frac{di_2}{dt}$$
$$v_2(t) = M \frac{di_1}{dt} + L_2 \frac{di_2}{dt}$$

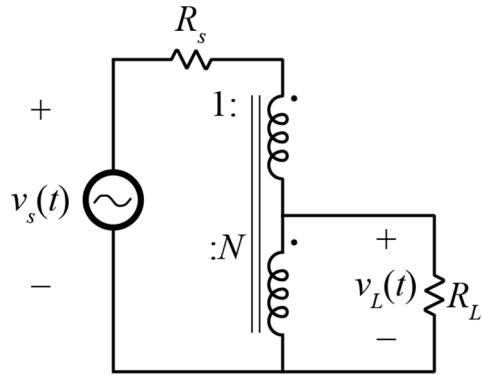
Phasor Domain



Impedance

Phasor Circuit Analysis

Example Problem



Find $v_L(t)$ for $v_s(t) = 170\cos(2\pi 60t)$ and for $R_s = 10 \Omega$, $N = 0.1$, and $R_L = 50 \Omega$