

24. (a) What load impedance Z_L will draw the maximum average power from the source shown in Fig. 11.38? (b) Calculate the maximum average power supplied to the load.

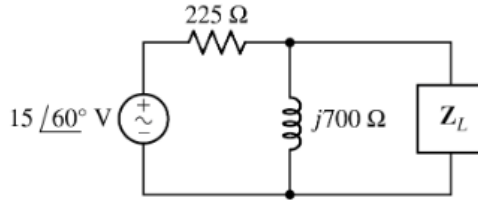
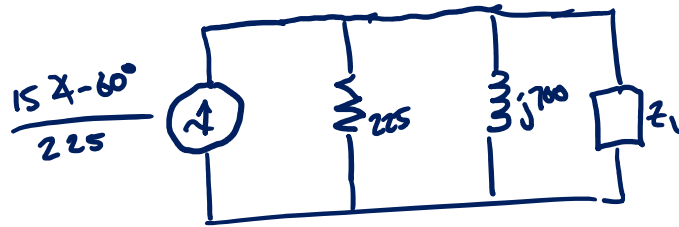
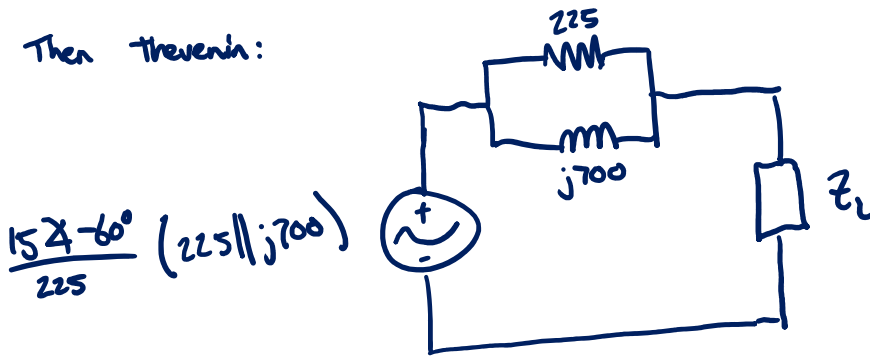


FIGURE 11.38

(a) Let's actually do the source transformations. First Norton:



Then Thevenin:



so we want $Z_L^* = 225 \parallel j700 = 204 + j65.5 \Omega$

for max power, $Z_L = 204 - j65.5 \Omega$

(b) As long as we did (a) correctly, we have a matched circuit. We can calculate the value of the Thevenin source, above, and solve. But an easier approach is to note that $Z_L \parallel j700$ must be 225Ω for the matching to work, and real power only goes to the real part of Z_L , so:



$$P_L = \frac{|V_x| |I_x|}{2} \cos(0^\circ) = \frac{\left(\frac{15}{2}\right) \left(\frac{15}{400}\right)}{2}$$

$$P_L = 125 \text{ mW}$$