

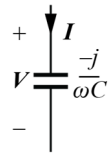
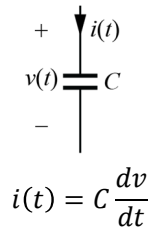
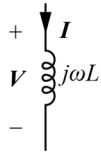
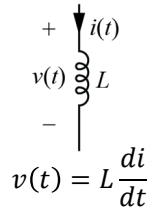
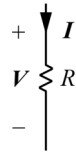
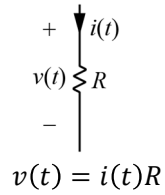
Phasor Transformation

Phasor Notation

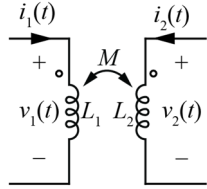
Phasor Circuit Elements

Time Domain

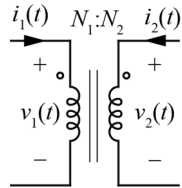
Phasor Domain



Time Domain

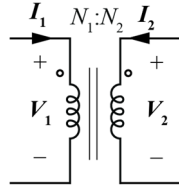
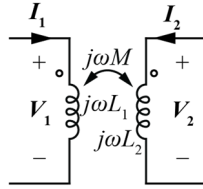


$$v_1(t) = L_1 \frac{di_1}{dt} + M \frac{di_2}{dt}$$
$$v_2(t) = M \frac{di_1}{dt} + L_2 \frac{di_2}{dt}$$



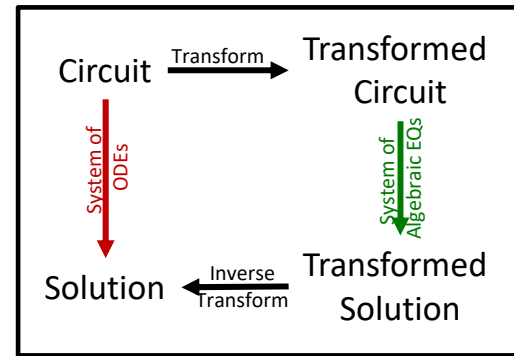
$$\frac{v_1(t)}{N_1} = \frac{v_2(t)}{N_2}$$
$$N_1 i_1(t) + N_2 i_2(t) = 0$$

Phasor Domain

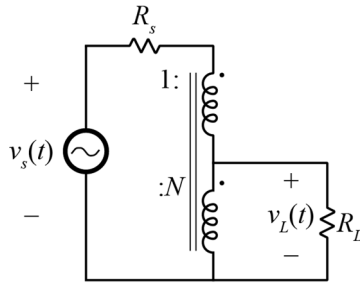


Impedance

Phasor Circuit Analysis



Example Problem



Find $v_L(t)$ for $v_s(t) = 170\cos(2\pi 60t)$ and for $R_s = 10 \Omega$,
 $N = 0.1$, and $R_L = 50 \Omega$

