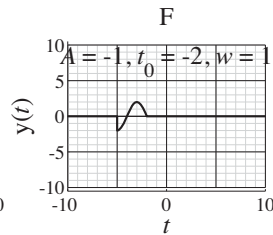
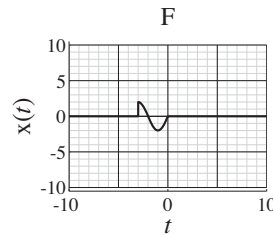
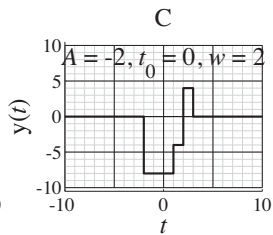
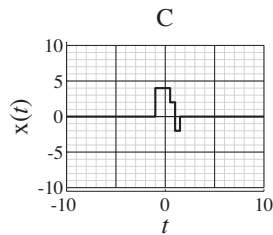
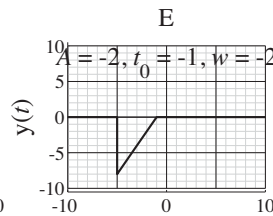
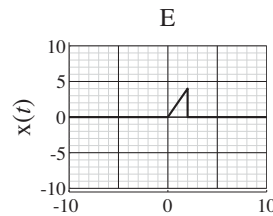
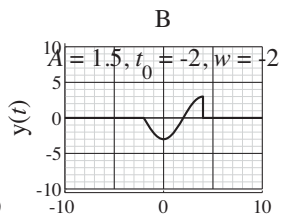
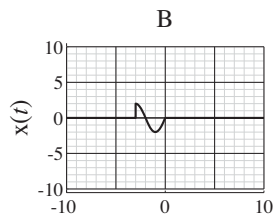
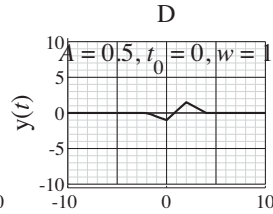
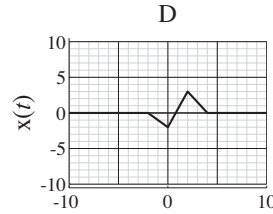
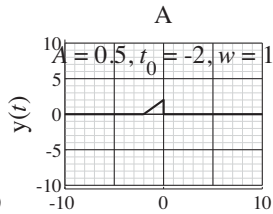
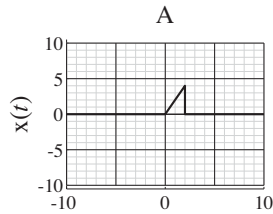


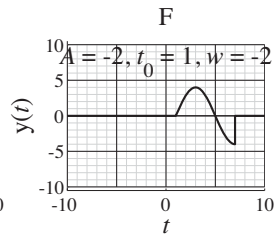
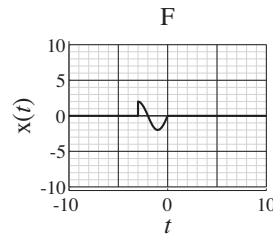
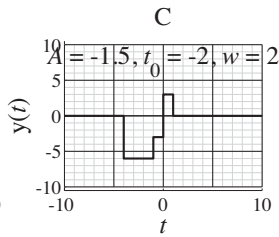
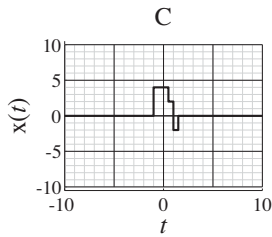
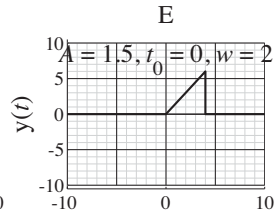
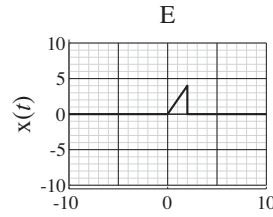
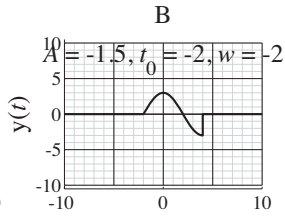
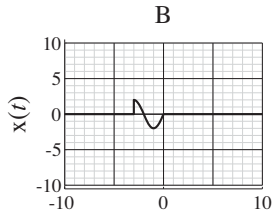
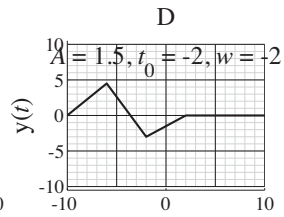
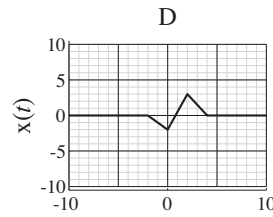
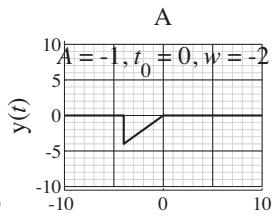
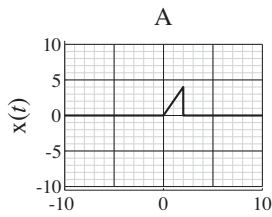
# Solution of ECE 315 Test 1 F08

Below are pairs of graphs of a function  $x(t)$  and a function  $y(t) = Ax\left(\frac{t-t_0}{w}\right)$ . For each pair of graphs find the numerical values of  $A$ ,  $t_0$  and  $w$ . Put your answers in the spaces provided below.



# Solution of ECE 315 Test 1 F08

Below are pairs of graphs of a function  $x(t)$  and a function  $y(t) = Ax\left(\frac{t-t_0}{w}\right)$ . For each pair of graphs find the numerical values of  $A$ ,  $t_0$  and  $w$ . Put your answers in the spaces provided below.



# Solution of ECE 315 Test 1 F08

Below are pairs of graphs of a function  $x(t)$  and a function  $y(t) = Ax\left(\frac{t-t_0}{w}\right)$ . For each pair of graphs find the numerical values of  $A$ ,  $t_0$  and  $w$ . Put your answers in the spaces provided below.

