

Solution of ECE 316 Test 3 Su08

1. Find the numerical values of the constants.

$$(a) \quad 4e^{-5t} \cos(25\pi t) u(t) \xrightarrow{\mathcal{L}} A \frac{s+a}{s^2+bs+c}$$

$$4e^{-5t} \cos(25\pi t) u(t) \xrightarrow{\mathcal{L}} 4 \frac{s+5}{(s+5)^2 + (25\pi)^2}$$

$$4e^{-5t} \cos(25\pi t) u(t) \xrightarrow{\mathcal{L}} 4 \frac{s+5}{s^2+10s+25+(25\pi)^2} = 4 \frac{s+5}{s^2+10s+6193.5}$$

$$(b) \quad \frac{6}{(s+4)(s+a)} = \frac{2}{s+4} + \frac{b}{s+a}$$

$$\frac{6}{(s+4)(s+a)} = \frac{6}{s+4} + \frac{6}{s+a} = \frac{6}{s+4} + \frac{6}{s+a}$$

$$\frac{2}{s+4} + \frac{b}{s+a} = \frac{6}{s+4} + \frac{6}{s+a} \Rightarrow \frac{6}{a-4} = 2 \text{ and } \frac{6}{4-a} = b$$

$$\frac{6}{a-4} = 2 \Rightarrow a = 7$$

$$\frac{6}{4-7} = b = -2$$

$$\frac{6}{(s+4)(s+7)} = \frac{2}{s+4} + \frac{-2}{s+7} \text{ Check.}$$

2. Find the numerical values of the constants.

$$(a) \quad [A\sin(at) + B\cos(at)]u(t) \xleftrightarrow{\mathcal{L}} 3\frac{3s+4}{s^2+9}$$

$$[A\sin(at) + B\cos(at)]u(t) \xleftrightarrow{\mathcal{L}} \frac{9s+12}{s^2+9} = 9\frac{s}{s^2+9} + 4\frac{3}{s^2+9}$$

$$[A\sin(at) + B\cos(at)]u(t) \xleftrightarrow{\mathcal{L}} 9\cos(3t)u(t) + 4\sin(3t)u(t)$$

$$A = 4, \quad B = 9, \quad a = 3$$

$$(b) \quad Ae^{-at}[\sin(bt) + B\cos(bt)]u(t) \xleftrightarrow{\mathcal{L}} \frac{35s+325}{s^2+18s+85}$$

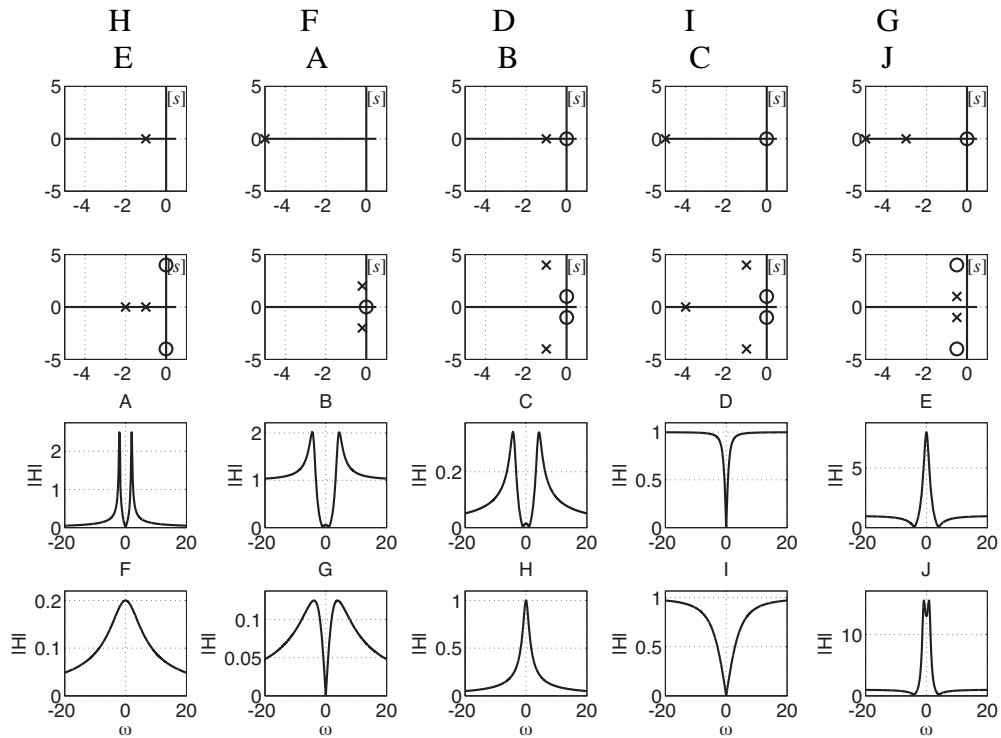
$$\frac{35s+325}{s^2+18s+85} = 5\frac{7s+65}{(s+9)^2+4} = 5\left[\frac{2}{(s+9)^2+4} + 7\frac{s+9}{(s+9)^2+4}\right]$$

$$5e^{-9t}[\sin(2t) + 7\cos(2t)]u(t) \xleftrightarrow{\mathcal{L}} \frac{35s+325}{s^2+18s+85}$$

3. Match the pole-zero diagrams to the magnitude frequency responses.
 (Assume that the transfer functions are of the form

$$H(s) = A \frac{(s - z_1)(s - z_2) \cdots (s - z_M)}{(s - p_1)(s - p_2) \cdots (s - p_N)}$$

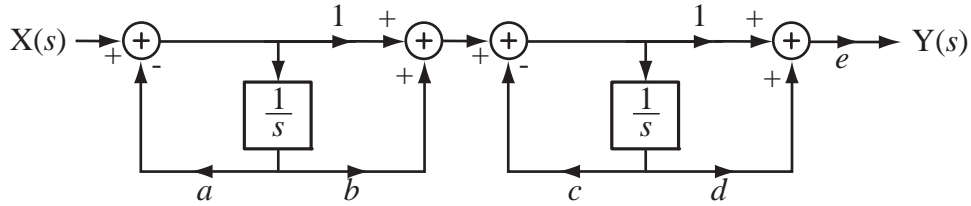
and that $A = 1$.) In each case all finite poles and zeros are shown.



4. A system has a transfer function

$$H(s) = \frac{5s^2 + 40s}{s^2 + 11s + 30}$$

Find numerical values of the constants a through e below to realize this transfer function. (There is more than one correct way to choose the constants.)



$$H(s) = \frac{5s^2 + 40s}{s^2 + 11s + 30} = 5 \times \frac{s}{s+5} \times \frac{s+8}{s+6}$$

$$a = 5, b = 0, c = 6, d = 8, e = 5$$

or

$$a = 6, b = 0, c = 5, d = 8, e = 5$$

or

$$a = 5, b = 8, c = 6, d = 0, e = 5$$

or

$$a = 6, b = 8, c = 5, d = 0, e = 5$$

Solution of ECE 316 Test 3 Su08

1. Find the numerical values of the constants.

$$(a) \quad 8e^{-2t} \cos(10\pi t) u(t) \xrightarrow{\mathcal{L}} A \frac{s+a}{s^2+bs+c}$$

$$8e^{-2t} \cos(10\pi t) u(t) \xrightarrow{\mathcal{L}} 8 \frac{s+2}{(s+2)^2 + (10\pi)^2}$$

$$8e^{-2t} \cos(10\pi t) u(t) \xrightarrow{\mathcal{L}} 8 \frac{s+2}{s^2+4s+4+(10\pi)^2} = 8 \frac{s+2}{s^2+4s+990.96}$$

$$(b) \quad \frac{4}{(s+6)(s+a)} = \frac{10}{s+6} + \frac{b}{s+a}$$

$$\frac{4}{(s+6)(s+a)} = \frac{4}{s+6} + \frac{4}{s+a} = \frac{4}{s+4} + \frac{4}{s+a}$$

$$\frac{10}{s+4} + \frac{b}{s+a} = \frac{4}{s+4} + \frac{4}{s+a} \Rightarrow \frac{4}{a-6} = 10 \text{ and } \frac{4}{6-a} = b$$

$$\frac{4}{a-6} = 10 \Rightarrow a = 6.4$$

$$\frac{4}{6-6.4} = b = -10$$

$$\frac{6}{(s+4)(s+7)} = \frac{2}{s+4} + \frac{-2}{s+7} \text{ Check.}$$

2. Find the numerical values of the constants.

$$(a) \quad [A\sin(at) + B\cos(at)]u(t) \xleftrightarrow{\mathcal{L}} 5 \frac{2s+12}{s^2+16}$$

$$[A\sin(at) + B\cos(at)]u(t) \xleftrightarrow{\mathcal{L}} \frac{10s+60}{s^2+16} = 10 \frac{s}{s^2+16} + 15 \frac{4}{s^2+16}$$

$$[A\sin(at) + B\cos(at)]u(t) \xleftrightarrow{\mathcal{L}} 10\cos(4t)u(t) + 15\sin(4t)u(t)$$

$$A = 15, \quad B = 10, \quad a = 4$$

$$(b) \quad Ae^{-at}[\sin(bt) + B\cos(bt)]u(t) \xleftrightarrow{\mathcal{L}} \frac{48s+258}{s^2+10s+34}$$

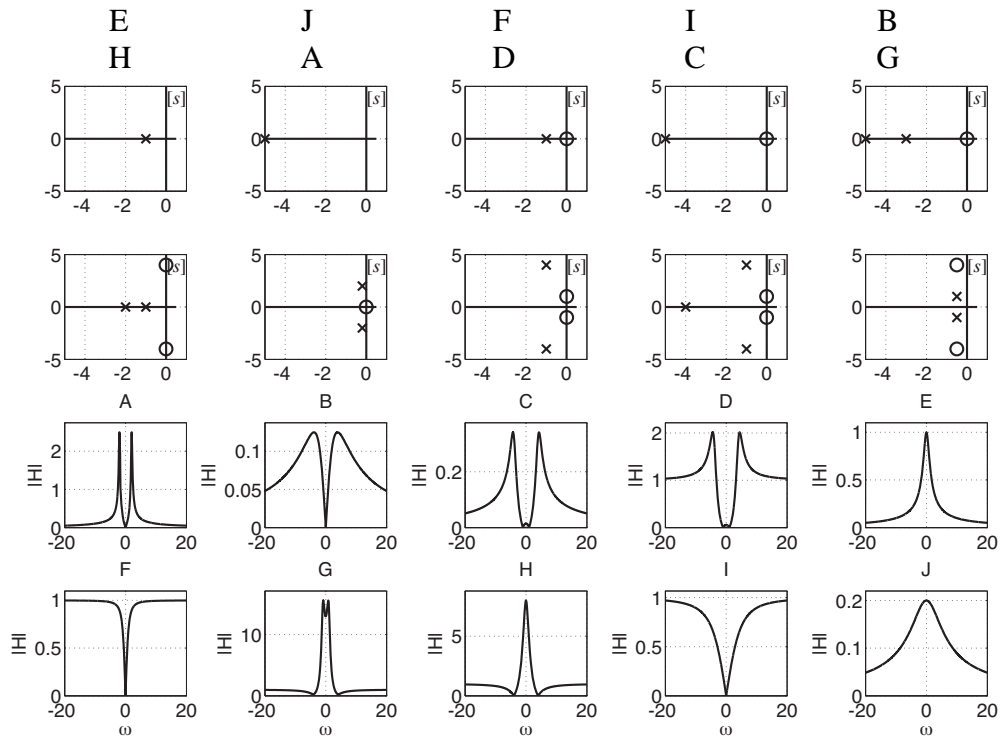
$$\frac{48s+258}{s^2+10s+34} = 6 \frac{8s+43}{(s+5)^2+9} = 6 \left[\frac{3}{(s+5)^2+9} + 8 \frac{s+5}{(s+5)^2+9} \right]$$

$$6e^{-5t}[\sin(3t) + 8\cos(3t)]u(t) \xleftrightarrow{\mathcal{L}} \frac{48s+258}{s^2+10s+34}$$

3. Match the pole-zero diagrams to the magnitude frequency responses.
 (Assume that the transfer functions are of the form

$$H(s) = A \frac{(s - z_1)(s - z_2) \cdots (s - z_M)}{(s - p_1)(s - p_2) \cdots (s - p_N)}$$

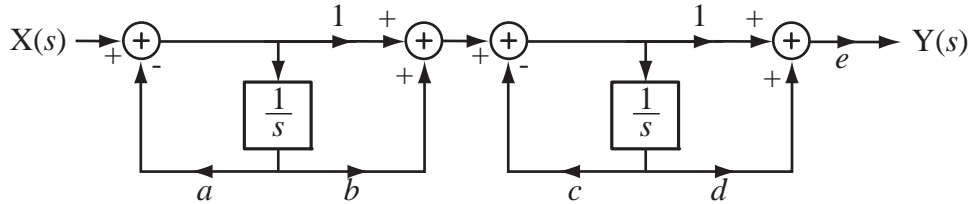
and that $A = 1$.) In each case all finite poles and zeros are shown.



4. A system has a transfer function

$$H(s) = \frac{7s^2 + 28s}{s^2 + 9s + 14}$$

Find numerical values of the constants a through e below to realize this transfer function. (There is more than one correct way to choose the constants.)



$$H(s) = \frac{7s^2 + 28s}{s^2 + 9s + 14} = 7 \times \frac{s}{s+7} \times \frac{s+4}{s+2}$$

$$a = 7, b = 0, c = 2, d = 4, e = 7$$

or

$$a = 2, b = 0, c = 7, d = 4, e = 7$$

or

$$a = 7, b = 4, c = 2, d = 0, e = 7$$

or

$$a = 2, b = 4, c = 7, d = 0, e = 7$$

Solution of ECE 316 Test 3 Su08

1. Find the numerical values of the constants.

$$(a) \quad 12e^{-6t} \cos(40\pi t) u(t) \xrightarrow{\mathcal{L}} A \frac{s+a}{s^2+bs+c}$$

$$12e^{-6t} \cos(40\pi t) u(t) \xrightarrow{\mathcal{L}} 12 \frac{s+6}{(s+6)^2 + (40\pi)^2}$$

$$12e^{-6t} \cos(40\pi t) u(t) \xrightarrow{\mathcal{L}} 12 \frac{s+6}{s^2+12s+36+(40\pi)^2} = 12 \frac{s+6}{s^2+12s+15827.4}$$

$$(b) \quad \frac{8}{(s+4)(s+a)} = \frac{2}{s+4} + \frac{b}{s+a}$$

$$\frac{8}{(s+4)(s+a)} = \frac{8}{s+4} + \frac{8}{s+a} = \frac{8}{s+4} + \frac{8}{s+a}$$

$$\frac{2}{s+4} + \frac{b}{s+a} = \frac{8}{s+4} + \frac{8}{s+a} \Rightarrow \frac{8}{a-4} = 2 \quad \text{and} \quad \frac{8}{4-a} = b$$

$$\frac{8}{a-4} = 2 \Rightarrow a = 8$$

$$\frac{8}{4-8} = b = -2$$

$$\frac{8}{(s+4)(s+8)} = \frac{2}{s+4} + \frac{-2}{s+8} \quad \text{Check.}$$

2. Find the numerical values of the constants.

$$(a) \quad [A\sin(at) + B\cos(at)]u(t) \xleftrightarrow{\mathcal{L}} 4 \frac{9s+3}{s^2+25}$$

$$[A\sin(at) + B\cos(at)]u(t) \xleftrightarrow{\mathcal{L}} \frac{36s+12}{s^2+25} = 36 \frac{s}{s^2+25} + 2.4 \frac{5}{s^2+25}$$

$$[A\sin(at) + B\cos(at)]u(t) \xleftrightarrow{\mathcal{L}} 36\cos(5t)u(t) + 2.4\sin(5t)u(t)$$

$$A = 2.4, \quad B = 36, \quad a = 5$$

$$(b) \quad Ae^{-at}[\sin(bt) + B\cos(bt)]u(t) \xleftrightarrow{\mathcal{L}} \frac{12s+126}{s^2+16s+89}$$

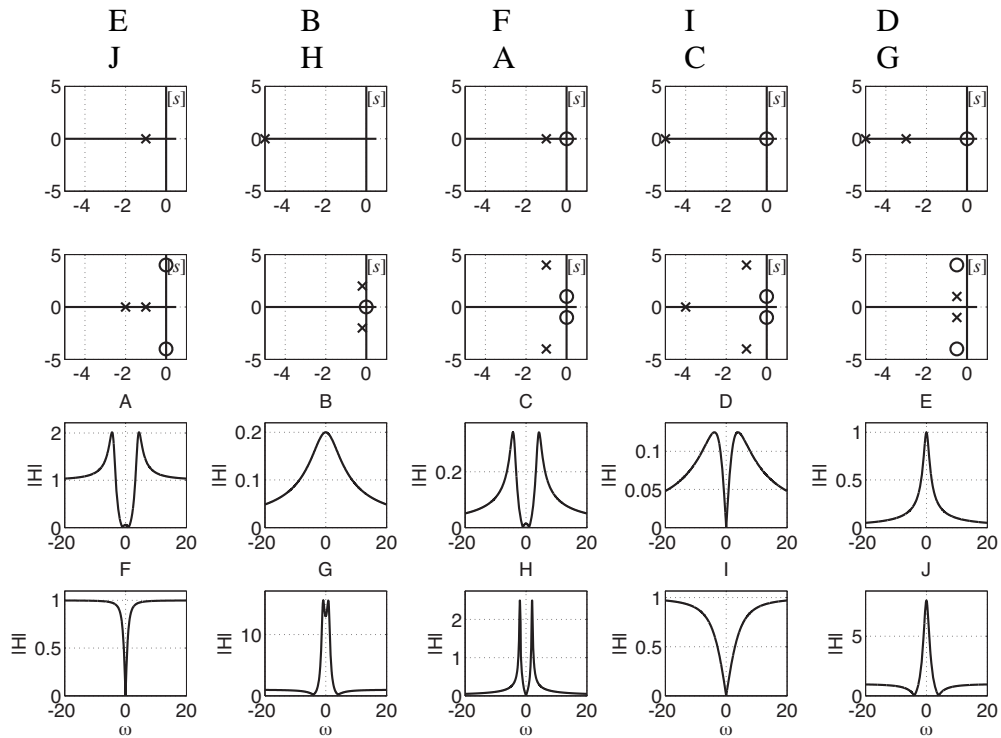
$$\frac{12s+126}{s^2+16s+89} = 6 \frac{2s+21}{(s+8)^2+25} = 6 \left[\frac{5}{(s+8)^2+25} + 2 \frac{s+8}{(s+8)^2+25} \right]$$

$$6e^{-8t}[\sin(5t) + 2\cos(5t)]u(t) \xleftrightarrow{\mathcal{L}} \frac{12s+126}{s^2+16s+89}$$

3. Match the pole-zero diagrams to the magnitude frequency responses.
 (Assume that the transfer functions are of the form

$$H(s) = A \frac{(s - z_1)(s - z_2) \cdots (s - z_M)}{(s - p_1)(s - p_2) \cdots (s - p_N)}$$

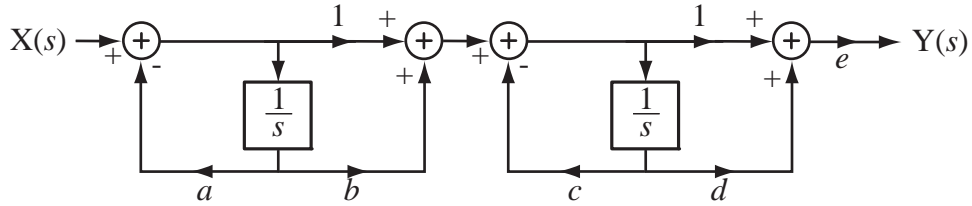
and that $A = 1$.) In each case all finite poles and zeros are shown.



4. A system has a transfer function

$$H(s) = \frac{2s^2 + 30s}{s^2 + 10s + 9}$$

Find numerical values of the constants a through e below to realize this transfer function. (There is more than one correct way to choose the constants.)



$$H(s) = \frac{2s^2 + 30s}{s^2 + 10s + 9} = 2 \times \frac{s}{s+1} \times \frac{s+15}{s+9}$$

$$a = 1, b = 0, c = 9, d = 15, e = 2$$

or

$$a = 9, b = 0, c = 1, d = 15, e = 2$$

or

$$a = 1, b = 15, c = 9, d = 0, e = 2$$

or

$$a = 9, b = 15, c = 1, d = 0, e = 2$$