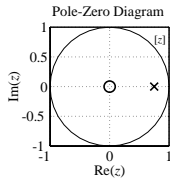
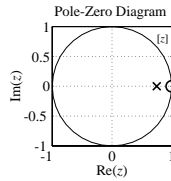


Solution of ECE 316 Test #10 S03 4/2/03 #1

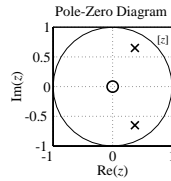
1. For each magnitude frequency response and each unit sequence response fill in the blank with the corresponding pole-zero diagram designation A, B, C, D or E.



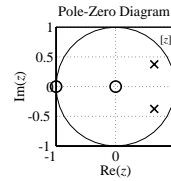
A



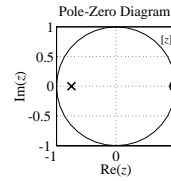
B



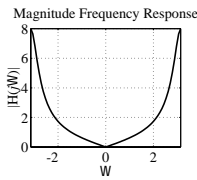
C



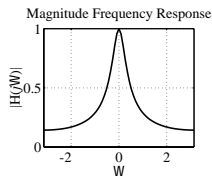
D



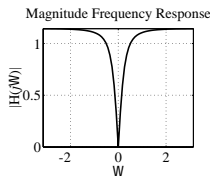
E



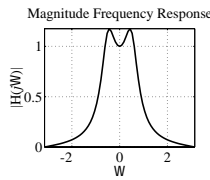
E



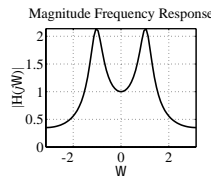
A



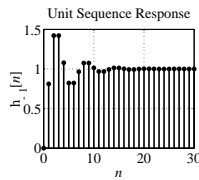
B



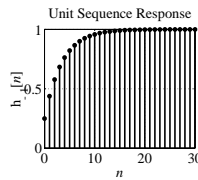
D



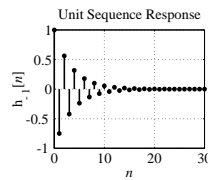
C



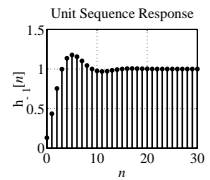
C



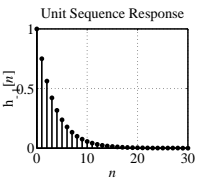
A



E



D



B